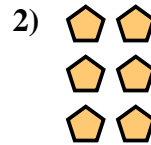




Write an equation to express the array and then find the number of shapes.

Answers





Ex.  $2 \times 2 = 4$

1. \_\_\_\_\_

2. \_\_\_\_\_

3. \_\_\_\_\_





4. \_\_\_\_\_

5. \_\_\_\_\_

6. \_\_\_\_\_

7. \_\_\_\_\_





8. \_\_\_\_\_

9. \_\_\_\_\_

10. \_\_\_\_\_



11. \_\_\_\_\_



12. \_\_\_\_\_

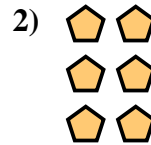
13. \_\_\_\_\_

14. \_\_\_\_\_





Write an equation to express the array and then find the number of shapes.



Answers

Ex.  $2 \times 2 = 4$

1.  $3 \times 3 = 9$

2.  $3 \times 2 = 6$

3.  $2 \times 3 = 6$

4.  $4 \times 3 = 12$

5.  $4 \times 2 = 8$

6.  $4 \times 4 = 16$

7.  $3 \times 5 = 15$

8.  $5 \times 4 = 20$

9.  $2 \times 4 = 8$

10.  $5 \times 5 = 25$

11.  $5 \times 2 = 10$

12.  $2 \times 5 = 10$

13.  $5 \times 3 = 15$

14.  $3 \times 4 = 12$

